

One more, one less



1 Complete the sentences.

a

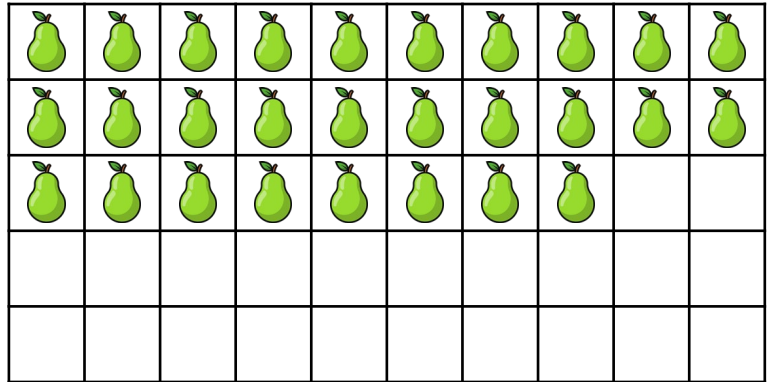
There are _____ pears.

One more than _____ is

_____.

One less than _____ is

_____.



b


There are _____ apples.

One more than _____ is

_____.


One less than _____ is

_____.



2 Find one more and one less.

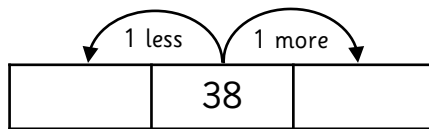
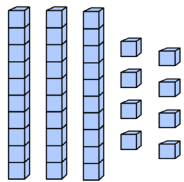
a



One more than _____ is _____.

One less than _____ is _____.

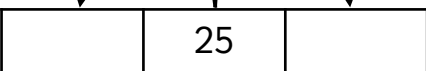
b



One more than _____ is _____.

One less than _____ is _____.

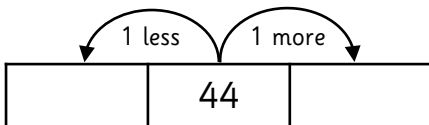
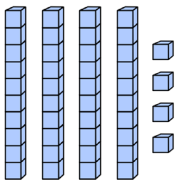
c



One more than _____ is _____.

One less than _____ is _____.

d



One more than _____ is _____.

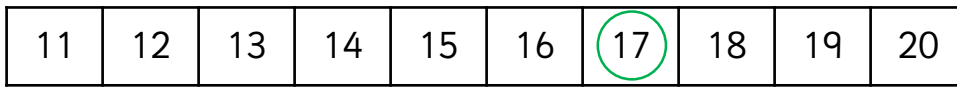
One less than _____ is _____.

One more, one less



1 Find one more and one less than the numbers shown on the number tracks.

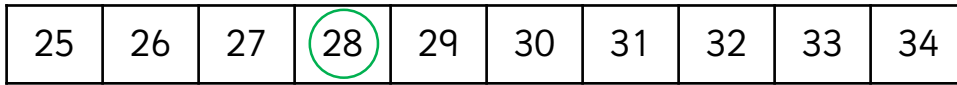
a



One more than _____ is _____.

One less than _____ is _____.

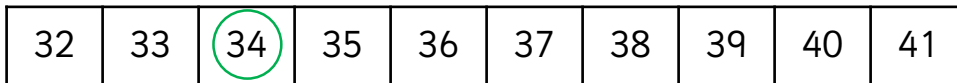
b



One more than _____ is _____.

One less than _____ is _____.


c



One more than _____ is _____.

One less than _____ is _____.

d

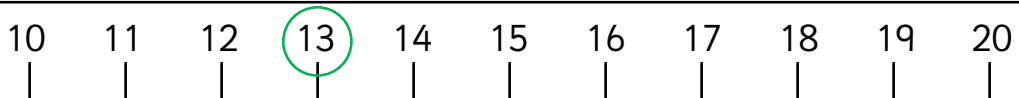


One more than _____ is _____.

One less than _____ is _____.

2 Find one more and one less than the numbers shown on the number lines.


a



One more than _____ is _____.

One less than _____ is _____.

b



One more than _____ is _____.

One less than _____ is _____.

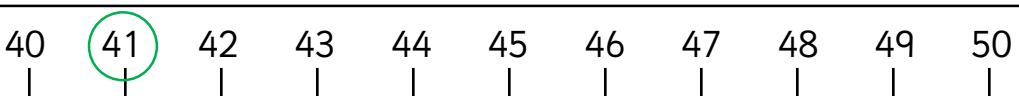
c



One more than _____ is _____.

One less than _____ is _____.

d



One more than _____ is _____.

One less than _____ is _____.

One more, one less



1 Complete the sentences.

a


There are _____ apples.

One more than _____ is

_____.

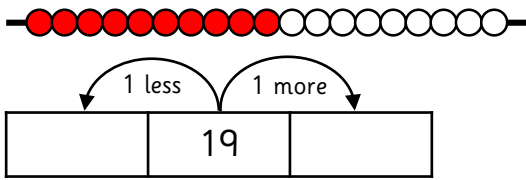
One less than _____ is

_____.



2 Find one more and one less.

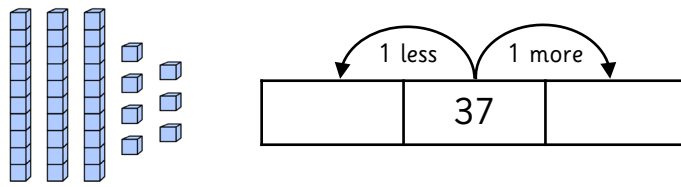
a



One more than _____ is _____.

One less than _____ is _____.

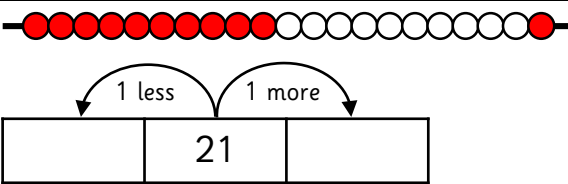
b



One more than _____ is _____.

One less than _____ is _____.

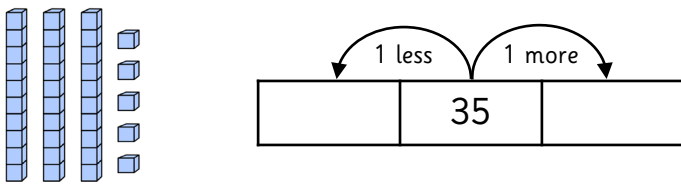
c



One more than _____ is _____.

One less than _____ is _____.

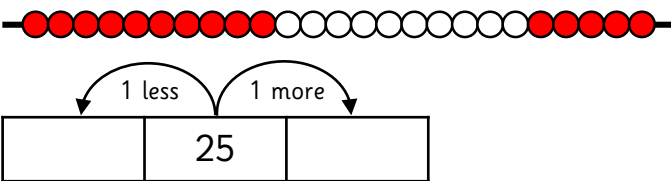
d



One more than _____ is _____.

One less than _____ is _____.

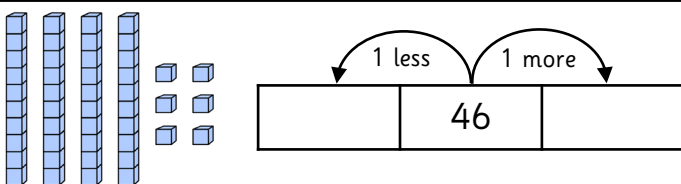
e



One more than _____ is _____.

One less than _____ is _____.

f



One more than _____ is _____.

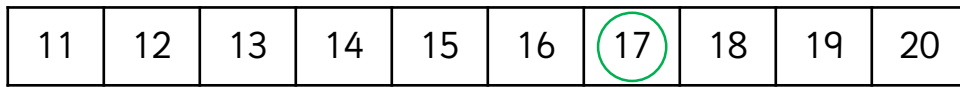
One less than _____ is _____.

One more, one less



1 Find one more and one less than the numbers shown on the number tracks.

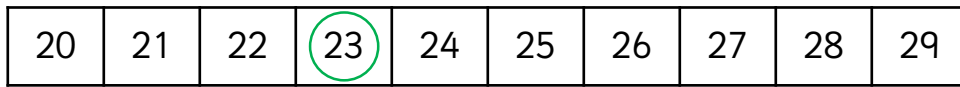
a



One more than _____ is _____.

One less than _____ is _____.

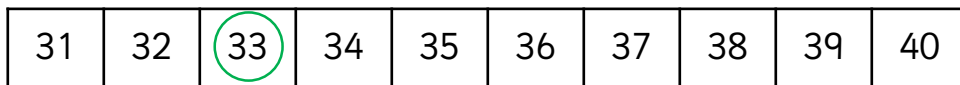
b



One more than _____ is _____.

One less than _____ is _____.


c



One more than _____ is _____.

One less than _____ is _____.

d

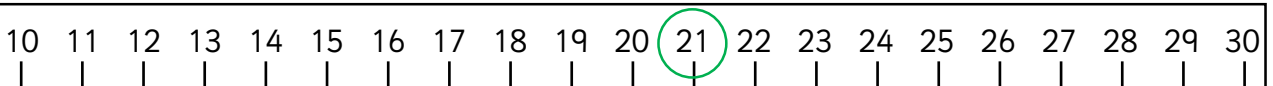


One more than _____ is _____.

One less than _____ is _____.

2 Find one more and one less than the numbers shown on the number lines.

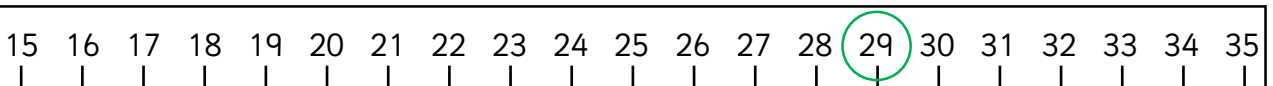
a



One more than _____ is _____.

One less than _____ is _____.

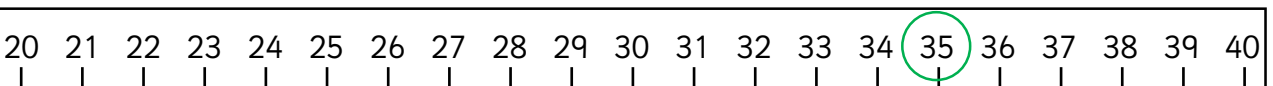
b



One more than _____ is _____.

One less than _____ is _____.

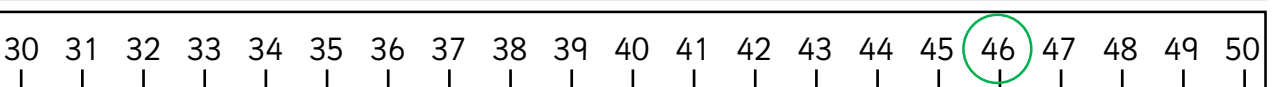
c



One more than _____ is _____.

One less than _____ is _____.

d



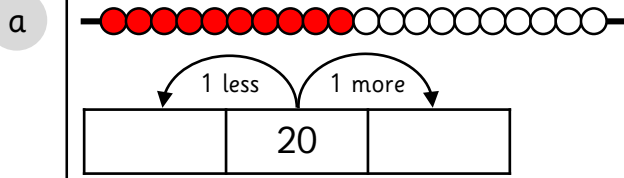
One more than _____ is _____.

One less than _____ is _____.

One more, one less

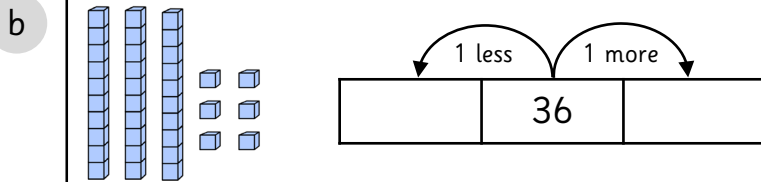


1 Find one more and one less.



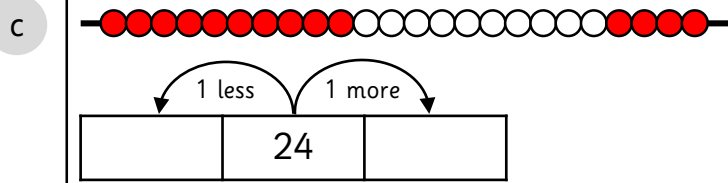
One more than _____ is _____.

One less than _____ is _____.



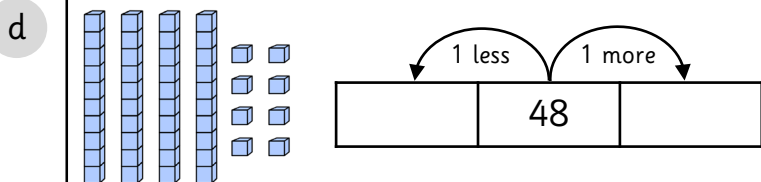
One more than _____ is _____.

One less than _____ is _____.



One more than _____ is _____.

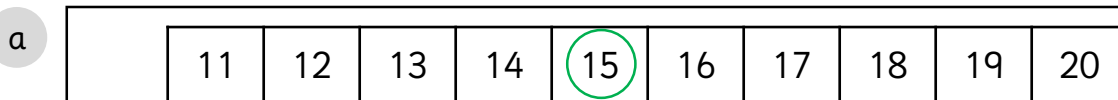
One less than _____ is _____.



One more than _____ is _____.

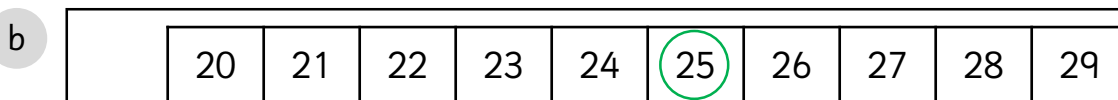
One less than _____ is _____.

2 Find one more and one less than the numbers shown on the number tracks.



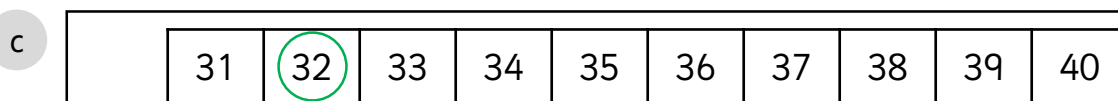
One more than _____ is _____.

One less than _____ is _____.



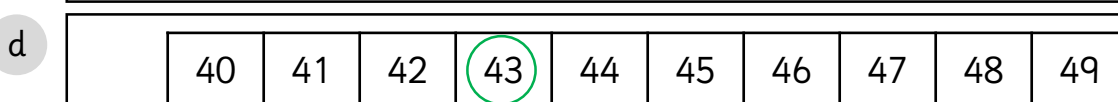
One more than _____ is _____.

One less than _____ is _____.



One more than _____ is _____.

One less than _____ is _____.



One more than _____ is _____.

One less than _____ is _____.

One more, one less



1 Find one more and one less.

a

10 11 12 13 14 15 16 17 18 19 20 21 22 23 24 25 26 27 28 29 30

One more than _____ is _____. One less than _____ is _____.

b

15 16 17 18 19 20 21 22 23 24 25 26 27 28 29 30 31 32 33 34 35

One more than _____ is _____. One less than _____ is _____.

c

20 21 22 23 24 25 26 27 28 29 30 31 32 33 34 35 36 37 38 39 40

One more than _____ is _____. One less than _____ is _____.

d

30 31 32 33 34 35 36 37 38 39 40 41 42 43 44 45 46 47 48 49 50

One more than _____ is _____. One less than _____ is _____.

2 Complete the table.

One less	Number	One more
	32	
		12
14		
	26	
		47
19		
	34	
		45
23		

Answers

To avoid wasting paper & ink,
please do not print this page.



One more, one less



1 Complete the sentences.

a

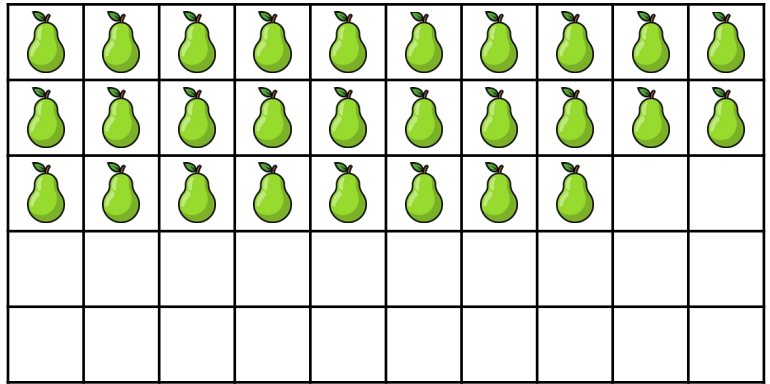
There are 28 pears.

One more than 28 is

29.

One less than 28 is

27.



b


There are 43 apples.

One more than 43 is

44.

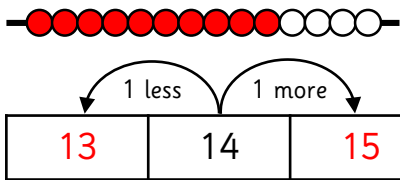
One less than 43 is

42.



2 Find one more and one less.

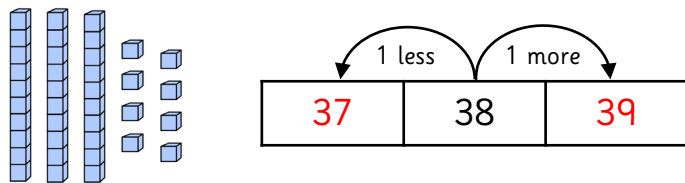
a



One more than 14 is 15.

One less than 14 is 13.

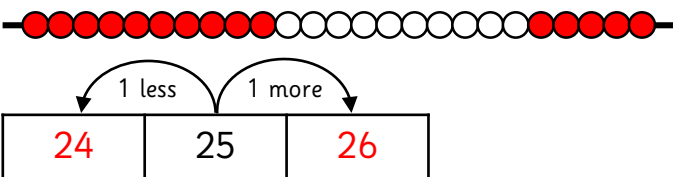
b



One more than 38 is 39.

One less than 38 is 37.

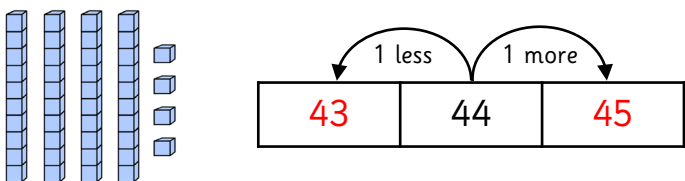
c



One more than 25 is 26.

One less than 25 is 24.

d



One more than 44 is 45.

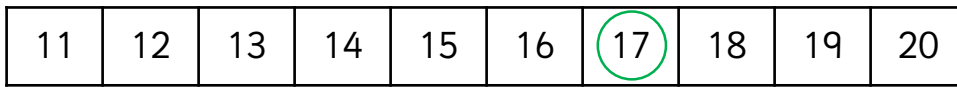
One less than 44 is 43.

One more, one less



1 Find one more and one less than the numbers shown on the number tracks.

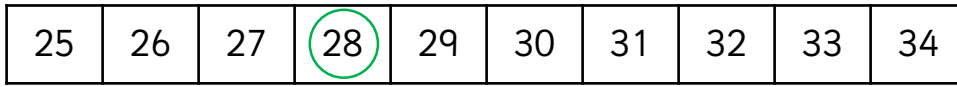
a



One more than 17 is 18.

One less than 17 is 16.

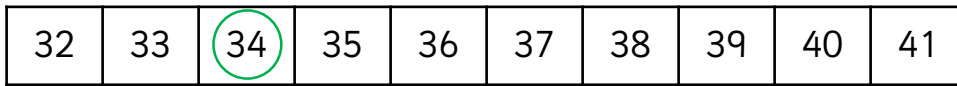
b



One more than 28 is 29.

One less than 28 is 27.

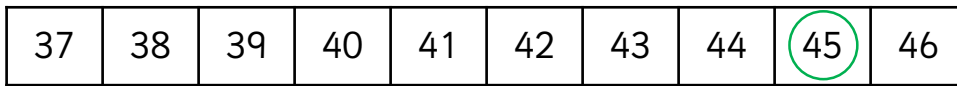
c



One more than 34 is 35.

One less than 34 is 33.

d

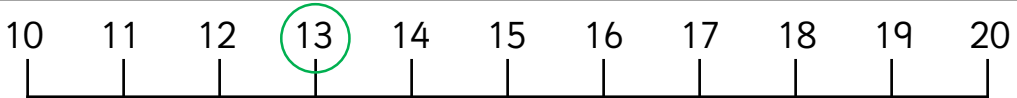


One more than 45 is 46.

One less than 45 is 44.

2 Find one more and one less than the numbers shown on the number lines.

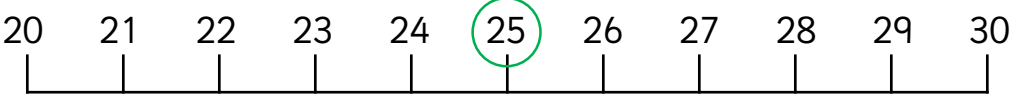
a



One more than 13 is 14.

One less than 13 is 12.

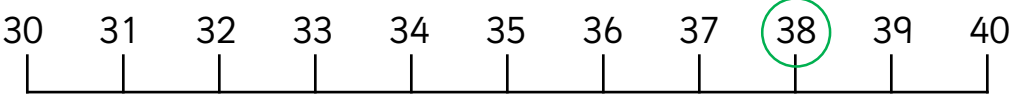
b



One more than 25 is 26.

One less than 25 is 24.

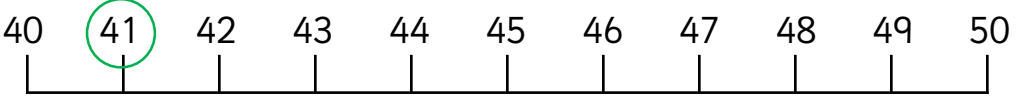
c



One more than 38 is 39.

One less than 38 is 37.

d



One more than 41 is 42.

One less than 41 is 40.

One more, one less



1 Complete the sentences.

a


There are 46 apples.

One more than 46 is

47.

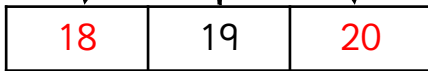
One less than 46 is

45.



2 Find one more and one less.

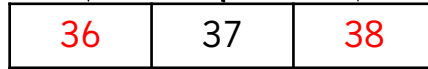
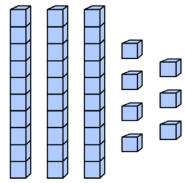
a



One more than 19 is 20.

One less than 19 is 18.

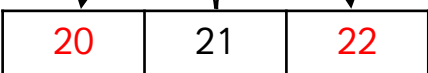
b



One more than 37 is 38.

One less than 37 is 36.

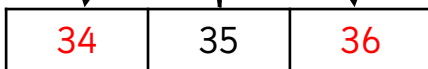
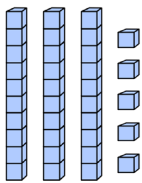
c



One more than 21 is 22.

One less than 21 is 20.

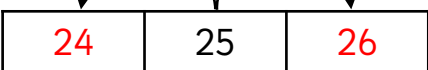
d



One more than 35 is 36.

One less than 35 is 34.

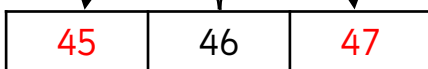
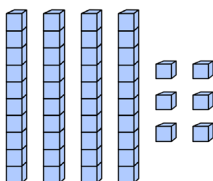
e



One more than 25 is 26.

One less than 25 is 24.

f



One more than 46 is 47.

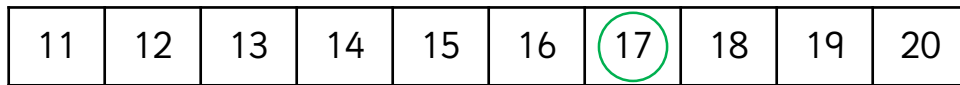
One less than 46 is 45.

One more, one less



1 Find one more and one less than the numbers shown on the number tracks.

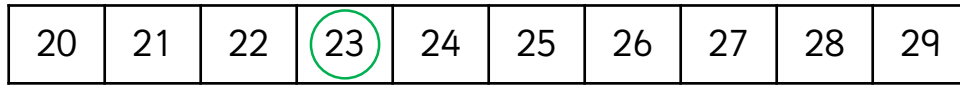
a



One more than 17 is 18.

One less than 17 is 16.

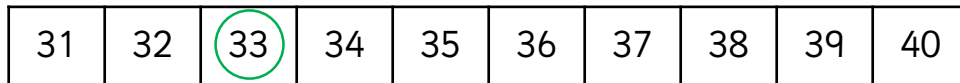
b



One more than 23 is 24.

One less than 23 is 22.


c



One more than 33 is 34.

One less than 33 is 32.

d



One more than 48 is 49.

One less than 48 is 47.

2 Find one more and one less than the numbers shown on the number lines.

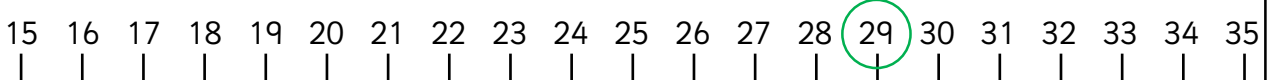
a



One more than 21 is 22.

One less than 21 is 20.

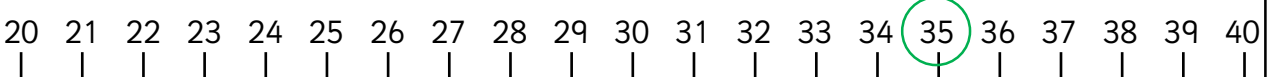
b



One more than 29 is 30.

One less than 29 is 28.

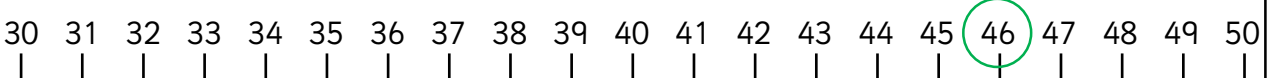
c



One more than 35 is 36.

One less than 35 is 34.

d



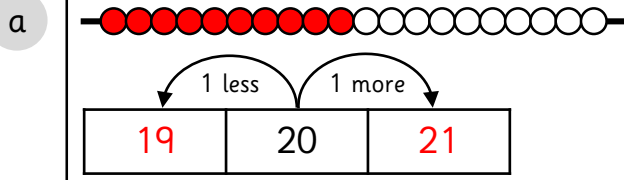
One more than 46 is 47.

One less than 46 is 45.

One more, one less

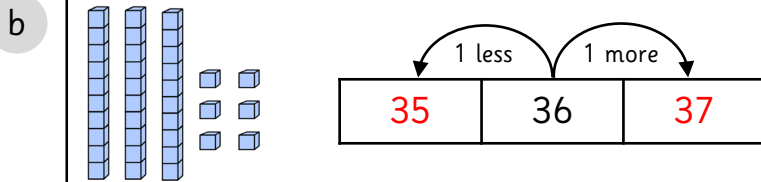


1 Find one more and one less.



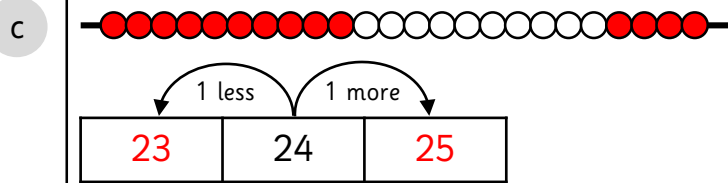
One more than 20 is 21.

One less than 20 is 19.



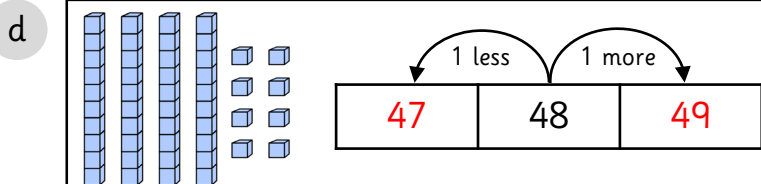
One more than 36 is 37.

One less than 36 is 35.



One more than 24 is 25.

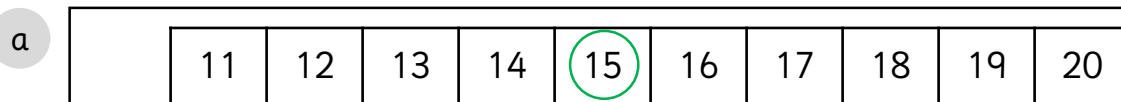
One less than 24 is 23.



One more than 48 is 49.

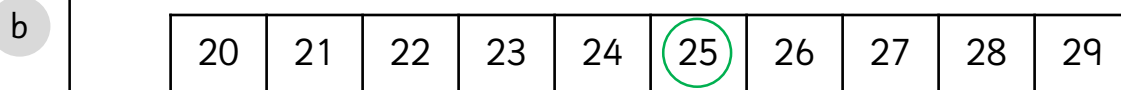
One less than 48 is 47.

2 Find one more and one less than the numbers shown on the number tracks.



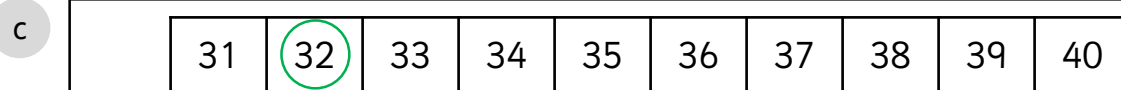
One more than 15 is 16.

One less than 15 is 14.



One more than 25 is 26.

One less than 25 is 24.



One more than 32 is 33.

One less than 32 is 31.



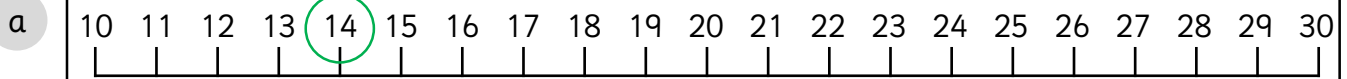
One more than 43 is 44.

One less than 43 is 42.

One more, one less

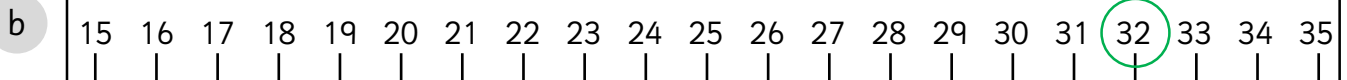


1 Find one more and one less. Complete the sentences.



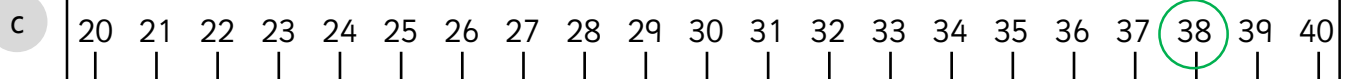
One more than 14 is 15.

One less than 14 is 13.



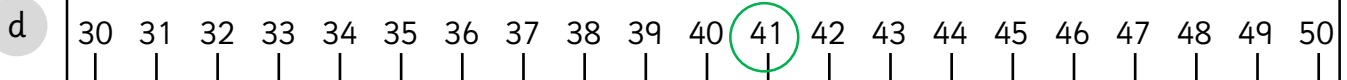
One more than 32 is 33.

One less than 32 is 31.



One more than 38 is 39.

One less than 38 is 37.



One more than 41 is 42.

One less than 41 is 40.

2 Complete the table.

One less	Number	One more
31	32	33
10	11	12
14	15	16
25	26	27
45	46	47
19	20	21
33	34	35
43	44	45
23	24	25